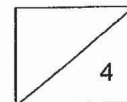



10. I am a 3-digit number.
The digit in my ones place is the greatest even number.
The digit in my tens place is 3 less than the digit in my ones place.
The digit in my hundreds place is 2 more than the digit in my tens place.
What number am I?

Ans: _____

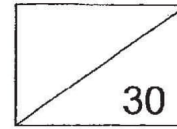
11. The sum of 3 numbers is 9133. If the first number is 987 and the second number is 3340, what is the third number?

Ans: _____





**Red Swastika School
Primary 3
Milestone Check 1
Mathematics**



Name: _____ () Date: _____

Class: _____ Duration: 40 minutes

Section A: 5 Questions (2 marks each)

Choose the correct answer and write its number in the brackets provided.

1. Find the difference between 6598 and 325.

- (1) 3348
- (2) 6273
- (3) 6873
- (4) 6923

()

2. What is 63 tens more than 7942?

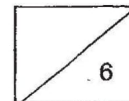
- (1) 7312
- (2) 7879
- (3) 8005
- (4) 8572


()

3. What is the greatest 4-digit odd number that can be formed using the digits 4, 5, 2 and 8 ?

- (1) 2458
- (2) 2485
- (3) 8425
- (4) 8542

()





4. In the number 1349, the value of the digit _____ is the smallest.

- (1) 1
- (2) 9
- (3) 3
- (4) 4

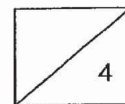
()


5. What is the missing number?

2785, 2970, 3155, 3340, _____, 3710, 3895

- (1) 3155
- (2) 3425
- (3) 3525
- (4) 3625

()





Section B: 6 Questions (2 marks each)

Work out the following sums and write the answers in the spaces provided.

6. Write 5812 in words.

Ans: _____

7. Find the sum of 3046 and 2975.

Ans: _____

8. Arrange the numbers in order, beginning with the smallest.

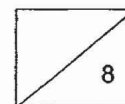



Ans: _____, _____, _____, _____
(smallest) (greatest)

9. What is the answer in the box?

$$4089 = 4000 + 100 - \square$$

Ans: _____





Section C: 2 Questions (4 marks each)

Do the following sums. Show your workings and statements clearly.

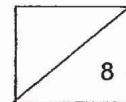
12. Mr Lee had 3200 ducks and chicken for sale. He had 796 ducks and the rest were chickens. How many more chickens than ducks did Mr Lee have?



Ans: _____


-
13. Javier has 2343 books. Susan has 589 more books than Javier. How many books do they have altogether?

Ans:

End of paper







SCHOOL : RED SWASTIKA PRIMARY SCHOOL

LEVEL : PRIMARY

SUBJECT : MATH

TERM : 2019 CA1

BOOKLET A

Q 1	Q2	Q3	Q4	Q5
2	4	3	2	3

SECTION B

Q6)	Five thousand eight hundred and twelve
Q7)	6021
Q8)	4884, 8448, 8484, 8844
Q9)	$4089 = 4000 + 100 + \boxed{.11}$
Q10)	758
Q11)	$3340 + 987 = 4327$ $9133 - 4327 = 4806$
Q12)	$3200 - 796 = 2404$ $2404 - 796 = 1608$
Q13)	$2343 + 589 = 2932$ $2932 + 2343 = 5275$