


Section B: Open-Ended Questions (8 marks)

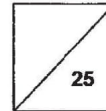
Read the following questions carefully and write your answers in the boxes provided.
Show your working clearly.

6. Write eight thousand and fifteen in numerals.

7. Use all the digits 0, 1, 5 and 6 to form the smallest 4-digit odd number. Each digit can only be used once.



HENRY PARK PRIMARY SCHOOL
2019 TERM REVIEW 1
MATHEMATICS
PRIMARY 3



Name: _____ ()

Class: Primary 3 _____

Duration of Paper: 30 minutes

Section A: Multiple Choice Questions (10 marks)

Questions 1 to 5 carry 2 marks each.

Choose the correct answer and write its number in the brackets provided.

1. In 6945, which digit is in the thousands place?


- (1) 9
- (2) 6
- (3) 5
- (4) 4

()

2. Find the sum of 6310 and 766.

- (1) 5544
- (2) 5556
- (3) 6076
- (4) 7076

()



3. $8752 = 8000 + 600 + \underline{\quad ? \quad} + 2.$

What is the missing number?

- (1) 5
- (2) 50
- (3) 100
- (4) 150

()

4. 3 tens more than ? is 3120.

What is the missing number?


- (1) 3090
- (2) 3117
- (3) 3123
- (4) 3150

()

5. Siti had \$60 more than her brother at first. She gave \$10 to her brother. How much more money does Siti have than her brother now?

- (1) \$40
- (2) \$50
- (3) \$70
- (4) \$80

()




8. What are the missing digits represented by the letters A and B?

$$\begin{array}{r} 5 \quad \boxed{A} \quad 1 \\ + \quad 3 \quad 3 \quad 9 \\ \hline \boxed{B} \quad 2 \quad 0 \\ \hline \end{array}$$

A:
B:

9. Zoe had some stickers. Her sister gave her 68 stickers. After that, Zoe then gave 35 stickers to her friend and had 170 stickers left. How many stickers did Zoe have at first?

--



Section C: Problem Sums (7 marks)

Read the problem sums carefully before solving them. Show your number equations, workings and final word statements clearly.


10. There were 3800 people at a funfair.
2068 of the people were children and the rest were adults.

a) How many adults were there at the funfair?

[2m] Working

b) Given that there were 1685 of the children were boys, how many girls were at the funfair?


[2m]




11. Andy bought a computer and a bicycle. The computer cost \$1245.
The bicycle cost \$330 less than the computer.
How much did Andy have to pay altogether? [3m]

Working

-END OF PAPER-



Dr.Kenny Education



SCHOOL : HENRY PARK PRIMARY SCHOOL

LEVEL : PRIMARY 3

SUBJECT : MATH

TERM : 2019 CA2

BOOKLET A

Q 1	Q2	Q3	Q4	Q5
2	4	4	1	1

BOOKLET B

Q6)	8015
Q7)	1065
Q8)	A : 8 B : 9
Q9)	$170 + 35 = 205$ $205 - 68 = 137$
Q10)	a) $3800 - 2068 = 1732$ b) $2068 - 1685 = 383$
Q11)	$\$1245 - \$330 = \$915$ $\$915 + \$1245 = \$2160$